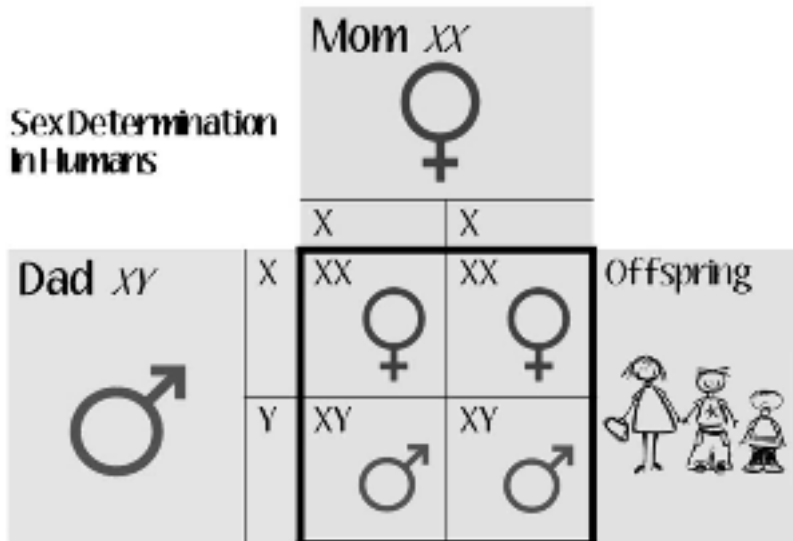


Sexual Development Worksheet - Use Module 53 (pp. 526-528) to complete.



1. Which **sex chromosome** (X or Y) is found in both men and women?

a. Which parent's sex cell determines the sex of the child?

PUBERTY!

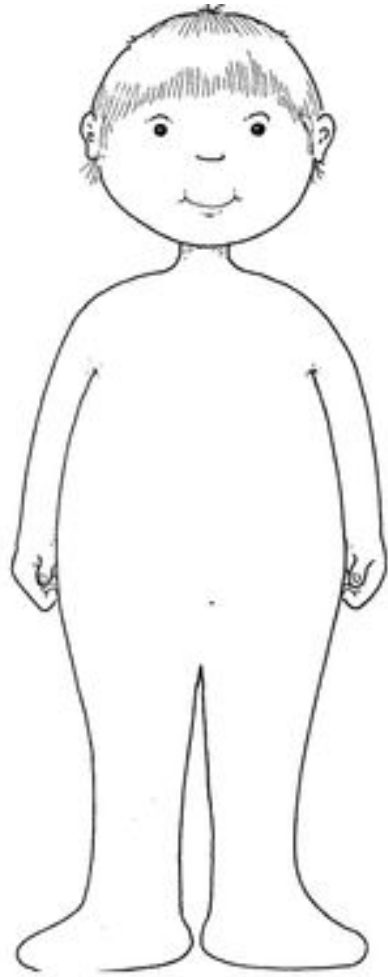
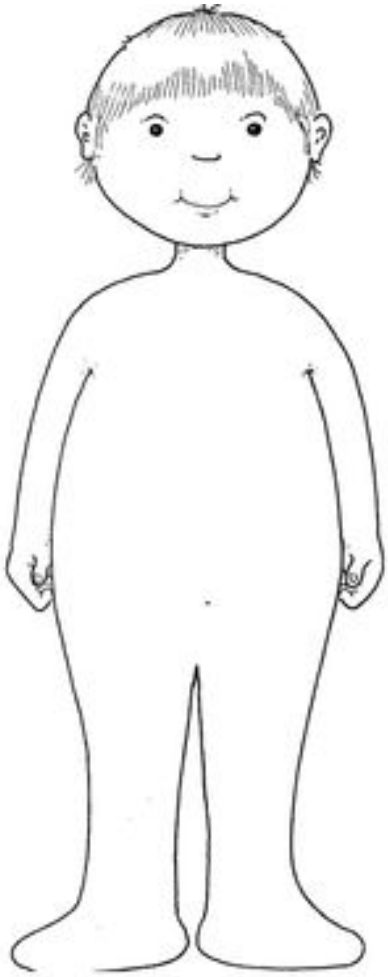
The period of sexual maturation, during which a person becomes capable of reproduction.

2. What is the difference between **primary sex characteristics** and **secondary sex characteristics**?



3. Define **marche** and **spermarche**.

4. Draw and label the **changes** to the male and female body.



5. Use 2 different colored **highlighters** to indicate which of the changes above are **primary** vs **secondary** sex characteristics.